

केन्द्रीय विद्यालय संगठन ,अहमदाबाद संभाग
KENDRIYA VIDYALAYA SANGATHAN, AHMEDABAD REGION
शिक्षार्थी प्राप्ति कसौटी
LEARNER'S ACHIEVEMENT TEST (LAT-2024-25) - CLASS: VI

Time allotted: 1 ½ hour(90 minutes)

Max Marks: 40

Name of the student:.....

Roll no.....

Name of the KV:.....

Obtained:.....

Examiner's sign:.....

Invigilator's sign:.....

General Instructions/सामान्य दिशा निर्देश:

- The question paper contains four sections- English, Hindi, Mathematics and EVS
- There are 40 objective type questions. All questions are compulsory.
- Each question carries 1 mark.
- In the event of marking more than one option, the answer shall be treated as wrong.

(Language Section-English)

Read the passage given below carefully to answer Q.1 and Q.2 that follow:

A farmer, looking for a source of water for his farm, bought a well from his neighbour. The neighbour was a cunning man though, and refused to let the farmer take water from the well. On asking why, he replied, "I sold the well to you , not the water" , and walked away.

1. What did the farmer buy from his neighbour?
a. stream b. pond c. well d. river
2. He replied, "I sold the well to you, not the water" – in this sentence , who does 'He' stand for?
 a. neighbour b. well c. farmer d. water
3. When a person tells the story of his life in his own words, it is called an
a. biography b. geography c. autobiography d. bibliography
4. She was excited to see the flock of _____
 a. geese b. geoses c. goose d. geeses
5. A sweet dish served after the main meal is called _____

a. Desert

b. Dessert

c. dasert

d. desart

6. When the members of a group talk together on a common topic, sharing each other's ideas, it is said that a _____ is taking place.
Choose the correct spelling to fill in the blank.

a. discuson

b. discussion

c. discation

d. discusiion

7. Rohan was late for school _____ he missed his school bus.

a. because

b. so

c. but

d. and

8. Write the proper form of the given action word.

Long long ago, in a forest, there _____ a goblin named Cruel.

a. live

b. living

c. lived

d. had live

9. Nobody liked Hari because he pinched everyone. He was taught a lesson by the seaside creatures when they pinched him till he was black and blue. Here, Black and blue means,

a. Hari got a fever.

b. Hari jumped in a blue dye tub.

c. Hari had bruises on his body.

d. Hari had a black and blue uniform.

10. Brave mother's brave young daughter!

Doubt and fear she left behind her.

Malu swam with all her might,

It didn't matter wrong or right.

This is a stanza from the poem Malu Bhalu, which you have learnt in class 5. What kind of a girl was Malu?

a. Coward

b. Brave

c. Cunning

d. None of the above

(भाषा विभाग - हिन्दी)

निम्नलिखित पदयांश को ध्यान से पढ़िए और प्रश्नों (११ एवं १२) के उत्तर लिखिए :-

फूलों से नित हँसना सीखो, भंवरो से नित गाना।

तरु की झुकी डालियों से, नित सीखो शीश झुकाना।

नदियों की धारा से सीखो, हरदम बहते रहना।

और धुएँ से सीखो बच्चों, ऊँचे ही पथ चढ़ना।

प्र-११) हमें हँसना किससे सीखना चाहिए ?

क. भंवरो से

ख. फूलों से

ग. नदियों से

घ. डालियों से

प्र-१२) हमें धुएँ से क्या सीखना चाहिए ?

क. नित गाना

ख. बहते रहना

ग. ऊँचे पथ चढ़ना

घ. शीश झुकाना

प्र-१३) पाँच साला बेटू ने हमें फिर से आगाह किया। इस वाक्यांश में 'आगाह किया' का मतलब क्या होता है?

क. मनोरंजन किया

ख. बताया

ग. सचेत किया

घ. समझाया

प्र-१४) नीचे दिए गए मुहावरे का अर्थ ढूँढे तथा सही उत्तर पर गोला लगाए।

मुँह में पानी आना -

क. शर्मिंदा होना

ख. वैशर्म होना

ग. दुष्ट होना

घ. लालच आ जाना

प्र-१५) शुद्ध वर्तनी वाले शब्द पर गोला लगाओ।

क. विज्ञान

ख. विग्यान

ग. विज्ञान

घ. वीज्ञान

प्र-१६) नीचे दिए गए वाक्य में से विशेषण शब्द पर गोला लगाओ।

'हुदहुद एक बहुत ही सुंदर पक्षी है।'

क. हुदहुद

ख. सुंदर

ग. पक्षी

घ. बहुत

प्र-१७) 'खिचड़ी' शब्द कौन से प्रकार की संज्ञा है ?

क. व्यक्तिवाचक संज्ञा

ख. जातिवाचक संज्ञा

ग. भाववाचक संज्ञा

घ. समूहवाचक संज्ञा

प्र-१८) खाली जगह के लिए सही शब्द चुनिए।

सीता ने अपने मन में एक राज की बात छुपा रखी थी।

क. राज

ख. राज

ग. राज

घ. रज

प्र-१९) 'छोटी सी हमारी नदी' कविता में नदी की धार कैसी है?

क. गोल-मटोल

ख. टैदी-मेढी

ग. धार-दार

घ. डरावनी

प्र-२०) 'बिशन की दिलेरी' पाठ में शिकारी कौन से पक्षी का शिकार कर रहे थे ?


क. चमकादार

ख. गीदड़

ग. तीतर

घ. कौआ

(Mathematics Section)

Q-21) If  represents TEN, then given image represents how much?

a. 2340

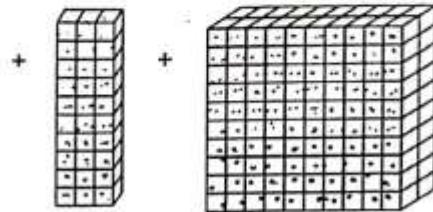
b. 4320

c. 432

d. 234

$$\begin{array}{r} 2000 \\ + 300 \\ + 40 \\ \hline 2340 \end{array}$$

$$\begin{array}{r} 400 \\ + 3000 \\ + 2000 \\ \hline 0 \end{array}$$



Q-22) The number that is 100 less than 10,000 is

a. Nine thousand

b. Nine thousand nine hundred

c. Ten thousand nine hundred

d. Nine thousand nine hundred and ninety

Q-23) Perimeter of a square is times of its side.

a. two

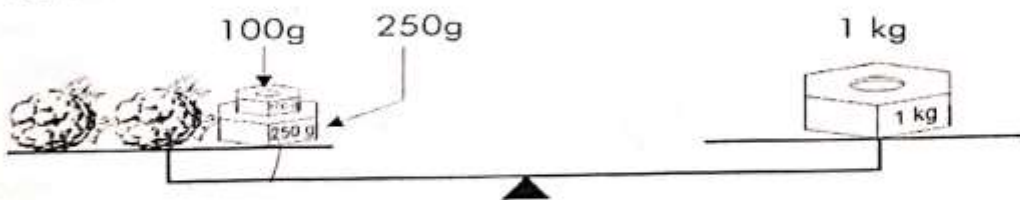
b. four

c. three

d. none of the above

Q-24) Mrs. Bhumika buys two cauliflowers. The vegetable seller weighs as shown below.

How much did the two cauliflowers (together) weigh?



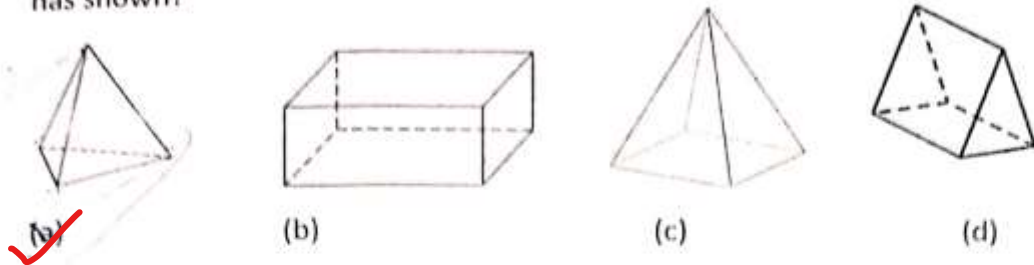
a. 350 g

b. 650 g

c. 1 kg

d. 1 kg 350 g

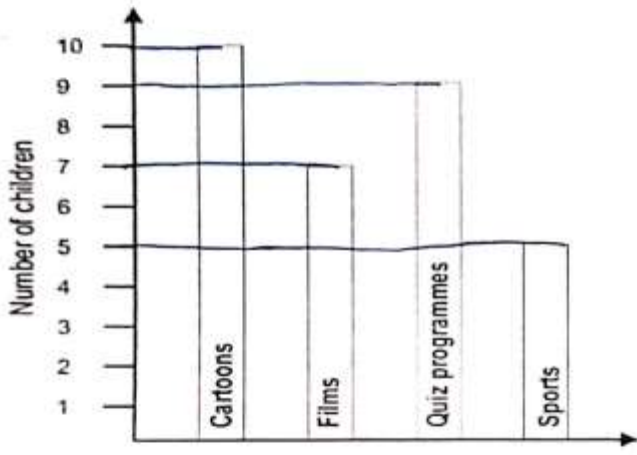
Q-25 Amar shows a 3 dimensional figure. It has 4 corners and 6 edges. Which figure Amar has shown?



Q-26 The question is based on the bar graph given below.

Ms. Anita asks each student of her class the kind of T.V. programme he or she likes the most. She puts down the result in the form of a bar graph shown below:

What is the total number of students in the class?



- a.26
- b.30
- c.31
- d.37

Q-27) $96 \div 2$ is not equal to

- a. 2×24
- b. 4×12
- c. 8×6
- d. 8×9

Q-28) There are 600 balls. If 30 balls are packed in a box, how would she calculate the number of boxes needed to pack all the balls? Tick on the correct option to get the answer.

- a. $600 \div 30$
- b. 600×30
- c. $600 + 30$
- d. $600 - 30$

Q-29) What time is equal to 14: 25 hours?

- a. 2: 25 p.m
- b. 2: 25 a.m.
- c. 4: 25 p.m.
- d. 4: 25 a.m.

Q-30) The price of a mobile phone is ₹15,000. Shopkeeper gives a discount of $\frac{1}{10}$ of the actual price. What will be the price of a mobile phone after the discount?

a. ₹ 14,500

b. ₹ 13,500

c. ₹ 14,900

d. ₹ 15,100

(Environmental Studies)

Q.31. See the family of Rohan, he lives with his parents and grandparents. His taai-tauji and their children also live in the same house. Can you tell which type of family does Rohan live in?

A. Single family

B. Joint Family

C. Nuclear family

D. None of these



Q.32. There is a three year old boy in Reshma's family. He was vaccinated for Polio last Sunday. Which of the following statements is correct about polio disease?

A. Polio is caused by Mosquito bite

B. Polio is passed from parents to the children

C. Polio spreads from person to person by touch

D. It can be stopped by Vaccination



Q.33. The Digestion of food starts right from our mouth. Can you tell the name of the digestive juice present in our mouth?

~~A. Bile juice~~

B. Pancreatic juice

C. Saliva

D. Lemon juice

Q.34. Which of the following food items is prepared from rice?

A. Chapatti

B. Halwa

C. Idli

D. Poori

Q.35. Namgyal lives in Ladakh. He said that the roof of his house is very important because-

A. It protects from extreme cold

B. It is used for drying fruits and vegetables

C. It is used for drying cow dung cakes

D. All of these

Q.36. Houses are of different types but can you tell which of the following is a Moving House?

A. Bungalow

B. Hut

C. Apartment

D. House Boat

Q.37. Even if you don't know swimming, you would not get drown in the Dead Sea. Can you guess the reason?

- A. Dead Sea is not much deeper B. The waters in the Dead Sea are very salty
C. Dead Sea has fresh water in it D. None of these

Q.38 In which of the following activities water is needed?

- A. To play B. To Sing
C. To Write D. To grow plants

Q.39 Omana's train crossed several states while going from Gujarat to her grandmother's house in Kerala. Can you fill in the blank by writing the name of the missing state?

Gujarat (Journey starts) → Maharashtra → Goa → _____ → Kerala
(Journey ends)

- A. Madhya Pradesh B. Bihar C. Uttar Pradesh D. Karnataka

Q.40. Damjibhai grows many different kinds of crops in his farm- cereals, pulses and vegetables. Can you tell which of the following crops is a cereal?

- A. Mung B. Chana (grams) C. Groundnuts D. Bajra (Millet)

