

केंद्रीय विद्यालय संगठन KENDRIYA VIDYALAYA SANGATHATN
Learner Achievement Test (SLATE)-2018
Class- III

TIME:50 min

M.M : 50

NAME: _____ CLASS & SEC _____ ROLL _____ DATE: _____

INSTRUCTIONS:

1. सभी बहुविकल्पीय प्रश्न हैं। All questions are 'Multiple Choice Questions'.
2. सभी प्रश्न अवनियन हैं। All questions are compulsory.
3. केवल एक ही विकल्प सही है। Only one option is correct.
4. केवल सही उत्तर पर (✓) का निशान लगाएँ। Only tick mark (✓) the correct answer.
5. प्रत्येक प्रश्न 01 अंक का है। Each questions carries 01 mark.

SUBJECT	ENGLISH(25)	MATHS (25)	TOTAL (50)
MARKS OBTAINED			

PART – I [ENGLISH]

Instruction for Question 1-5: Choose the most suitable option on the basis of the passage given below.

1. Rohit does not like staying at home.
 2. He is happy cycling around with his friends.
 3. However these children don't make noise.
 4. They love licking special ice-cream of the colony shop.
 5. They enjoy crunchy tiny figs in the ice-cream.
1. Staying in line 1 means –
A. playing B. sleeping C. living D. studying
 2. Which of the following is opposite in meaning to the word happy in line 2?
A. cry B. sad C. dull D. laugh
 3. 'Don't make noise' in line 4 means that children are
A. shy B. calm C. intelligent D. inside their houses
 4. Which of the following is correct spelling of special in line 4?
A. Speshal B. Spacial C. Special D. Specal
 5. Which of the following is opposite in meaning to the word tiny in line 5?
A. small B. black C. tasty D. big

Instruction for Question 6-20: There are three passages in this section. Each passage is followed by 4-6 questions. Answer the questions on the basis of the passage.

Big Baby

The elephant is a strong animal. It has two long white teeth, called tusks, and a very long nose, called trunk. Its fan shaped huge ears look like help hear sounds from very far. Did you know? Elephants use their ears to drive away flies! Usually, an adult female elephant gives birth to a baby, every four years. The baby elephant weighs 100 kilograms. That is a big baby! A human baby weighs around 3-4 kilograms. A baby elephant can walk one hour after its birth. Mother elephant guides its first steps with her trunk.

6. 'Huge' means -
 A. very strong B. very big C. Fan shaped D. special
7. Trunk is elephant's -
 A. ear B. tooth C. body D. nose
8. Which sentence in the passage says – "A baby elephant is very big" ?
 A. The elephant is a strong animal
 B. The baby elephant weighs 100 kilograms.
 C. A human baby weighs around 3-4 kilograms.
 D. A baby elephant can walk one hour after its birth.
9. According to the passage, what could a one-hour old baby elephant do?
 A. walk slowly B. fight with its tusk C. carry load D. eat sugarcane
10. 'Drive away' in the passage means same as –
 A. kill B. run away C. speed up D. keep out

Raja Got his Birthday Gift

Raja has a new bicycle. It is bright blue and shiny.
 It was a birthday gift from his uncle. He hid it behind garden bushes to surprise him.
 Raja saw the cycle when suddenly he looked behind the bushes chasing a ball thrown by his uncle.
 It was just what he wanted. He jumped with joy and gave her uncle a big hug.
 He loves his new bicycle, and he loves his uncle.

11. The cycle was hidden –
 A. behind the door B. in the park C. behind the bushes D. in Raja's bedroom
12. Raja saw his cycle while -
 A. plucking roses B. playing with his uncle
 C. returning from the school D. cutting cake in his birthday party
13. Why is cycle a surprise gift?
 A. It is very costly B. It is bright and shiny. C. It was unexpected. D. It was gifted by uncle.
14. 'Jumped with joy' indicates that Raja is –
 A. happy B. shocked C. surprised D. playful
15. Which sentence in the passage tells that Raja wanted to have a cycle?
 A. Raja has a new bicycle. B. It was a birthday gift from his uncle.
 C. It was just what he wanted. D. He loves his new bicycle.

Sports Day Celebration

Come and enjoy watching sporty kids of primary classes. Lots of fun and excitement! You just can't wait.
 Basketball, cricket, froggy jump, rolling kids, laughing aloud, talking stars, and many more.
 Where: School Playground
 When: Friday, 24th September, 9:00AM-12:30 PM
 Free Entry! Please take your seats at least 30 minutes before the event starts.
 Lucky draw for parents – Winners would participate in the game of their choice.

16. This notice is written mainly for –
 A. children B. teachers C. parents D. coaches
17. Which of these information is NOT given in the notice?
 A. Venue B. Timing C. Entry charges D. Refreshment

18. Riya's parents won the lucky draw. They can -
 A. sing a song B. get a trophy C. play their favourite game D. sit in the front row
19. What instruction has been given for parents?
 A. Reach venue on suggested time. B. Wear clothes of suggested colour.
 C. Pick up your child once function is over. D. Bring your water bottle and sunglasses.
20. Which of the following is least likely to be a part of event?
 A. Relay race B. Spoon race C. Skating D. Essay writing

Instructions: Question 21- 25 intend to assess writing skills to use grammar. Choose the most appropriate answer among given options.

21. Which of the following would complete the following sentence?

I had _____ in the morning.

- A. an apple B. an banana C. a orange D. a egg

22. Which of the following is a correct sentence?

- A. Years eight I am old. B. i am eight years old.
 C. I am eight years old. D. I am eight old years.

23. Which of the following would complete the following sentence?

Ram and Bheem _____ many toys.

- A. is B. ar e C. has D. hav e

24. What is the correct way to write the underlined part of the sentence?

We saw india gate in Delhi.

- A. india gate B. India gate C. India Gate D. Indiagate

25. Which of the following would best fill the blank?

Dogs _____ to chase cats.

- A. like B. is liking C. are liking D. likes

PART – II [MATHS]

1. Anil has three-hundred and seven rupees in his piggy bank. Which of the following is same as three-hundred and seven?

- A. 370 B. 307 C. 730 D. 3007

2. Which of the following is same as 5 tens, 7 hundreds and 3 ones?

- A. 357 B. 375 C. 573 D. 753

3. New Pen Company produced 253 pens in July and 672 pens in August. How many New Pen Company produced in these two months?

- A. 529 B. 815 C. 825 D. 925

4. City Book Shop had 777 notebooks in its store. If 409 notebooks were sold, how many notebooks are left in the store?

- A. 268 B. 368 C. 372 D. 379

5. There are 42 red and yellow beads in Neeti's necklace. There are 19 red beads. How many yellow beads are there in the necklace?

- A. 23 B. 33 C. 51 D. 61

6. There are two rows of roses in the garden. Each row has 8 plants. Which of the following would give number of rose plants in 2 rows?

- A. $2 + 8$ B. $8 \div 2$ C. 2×8 D. $8 - 2$

7. Rohit packed 35 chocolates in 7 pouch bags. He used following method to find how many chocolate to be put in each bag.

$$35 \div 5 = 7$$

Which of these shows the same relation?

- A. $7 \div 5 = 35$ B. $35 \times 7 = 5$ C. $5 + 7 = 35$ D. $5 \times 7 = 35$

8. Raju cut 36 centimeter long ribbon into 4 equal pieces. What is the length of each ribbon piece?

- A. 8 cm B. 9 cm C. 12 cm D. 32 cm

9. Aman bought following items from a stationery shop.

Items Quantity Price per item

Erasers 2 Rs 4

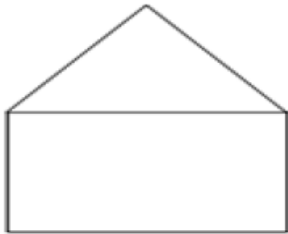
Pencils 3 Rs 5

Pen 1 Rs 5

What amount does he need to pay to the shop keeper?


- A. Rs 28 B. Rs 14 C. Rs 13 D. Rs 6

10. How many straight lines are there in the shape given below?



- A. 2 B. 4 C. 6 D. 7

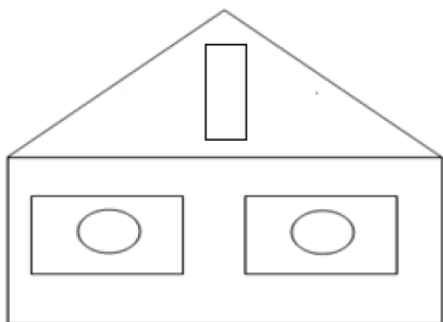
11. Shahid pasted three bindies on a paper as shown below. He joined these bindies using straight lines.



Which of the following could be the shape formed by joining bindies?

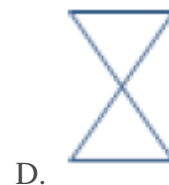
- A. Square B. Rectangle C. Circle D. Triangle

12. What is the maximum number of rectangles that could be counted in the following shape?

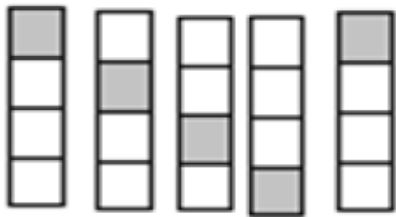






- A. 2 B. 3 C. 4 D. 5

13. Which of the following has four corners and four sides?

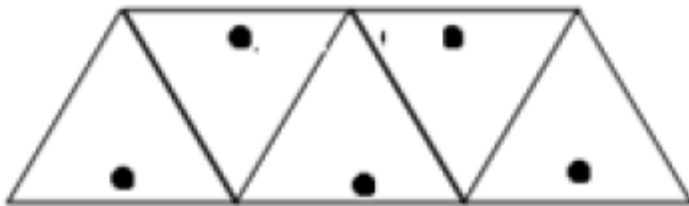


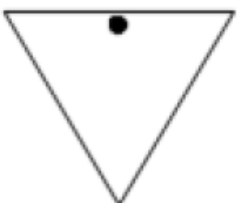
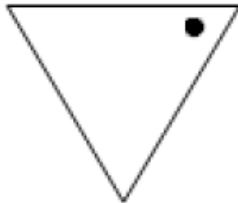
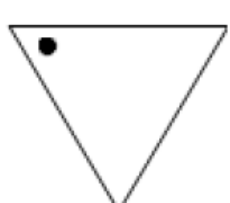
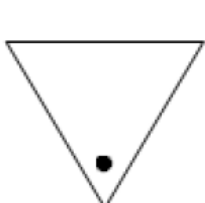
14. Which of the following could be the next shape in the given pattern.



- A.  B.  C.  D. 

15. The shown design follows a fixed tiling pattern. If the pattern continues, which of these could be the next tile?



- A.  B.  C.  D. 

16. The movie started at the time shown by the following clock. If the movie is 2 hours long, what would be the time when the movie ends?



- A. 2 o'clock B. 7 o'clock C. 9 o'clock D. 11 o'clock

17. Suman's birthday is on last Friday of November. When is Suman's birthday?

November						
SUN	MON	TUE	WED	THU	FRI	SAT
			1	2	3	4
5	6	7	8	9	10	11
12	13	14	15	16	17	18
19	20	21	22	23	24	25
26	27	28	29	30		

A. 3rd November B. 24th November C. 26th November D. 30th November

18. Which of the following measurement does vegetable seller use while selling vegetables?

A. Metre B. Litre C. Kilogram D. Kilometre

19. Rakesh has to fill a water tank. He has 4 objects.

Jug Bucket Spoon Cup

Which of these is most appropriate to fill the tank?

A. Jug B. Bucket C. Cup D. Spoon

20. The height of four friends has been given in the following table.

Naveen	1 m 50 cm
Sapna	2 m
Sumit	1 m 68 cm
Alka	1 m 95 cm

Who is the tallest among them?

A. Sapna B. Alka C. Sumit D. Naveen

21. Sonal bought 1 kg each of apples, grapes and mangoes. The rate chart of the shop has been shown below.

<u>RATE- CHART</u>	
Fruits	Price per Kg
Apple	85
Grapes	50
Mangoes	75
Oranges	50

How much money does she need to pay to the shopkeeper?

A. Rs 135 B. Rs 200 C. Rs 210 D. Rs 260

22. The table given below shows the sale of ice-creams in three days.

Days	No. of ice-creams sold
Wednesday	30
Thursday	48
Friday	32
Saturday	65

The number of ice-creams sold on Friday is -

- A. 30 B. 32 C. 48 D. 65

23. Following table shows lunch brought by four friends?

	Monday	Tuesday
Rohit	Paratha	Sandwich
Meena	Cheelee	Idli
Syed	Paratha	Sandwich
Raman	Biryani	Paratha

Which is the food item brought maximum number of time?

- A. Paratha B. Sandwich C. Cheele D. Idli

24. The pictograph given below represents the number of students who attended music class in a week.

How m any more students attended the class on Friday than Wednesday?

Days	
Monday	8 88888
Wednesday	888
Friday	88888
Sunday	88

- A. 2 B. 3 C. 5 D. 6

25. The graph given below shows the number of toy aeroplanes made in four months.

Months	Number of toy aeroplanes made
July	→ → → → → → →
August	→ → →
September	→ → → → → → → → →
October	→ → →
→ = 2 aeroplanes	

The maximum number of aeroplanes were made in -

- A. July B. August C. September D. October

ANSWER KEY

ENGLISH	MATHS		
1.	1.		
2.	2.		
3.	3.		
4.	4.		
5.	5.		
6.	6.		
7.	7.		
8.	8.		
9.	9.		
10.	10.		
11.	11.		
12.	12.		
13.	13.		
14.	14.		
15.	15.		
16.	16.		
17.	17.		
18.	18.		
19.	19.		
20.	20.		
21.	21.		
22.	22.		
23.	23.		
24.	24.		
25.	25.		